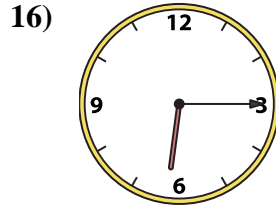
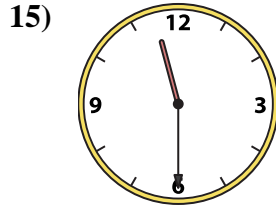
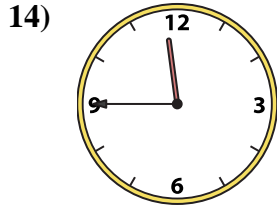
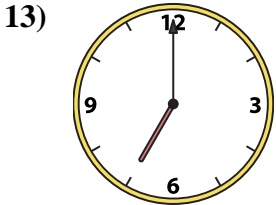
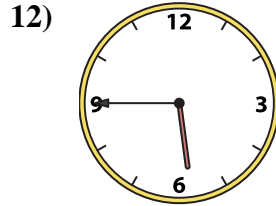
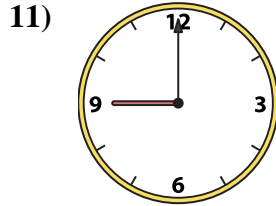
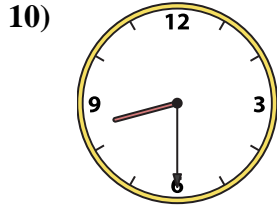

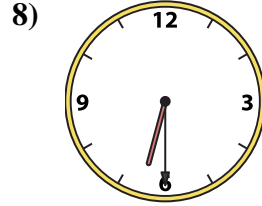
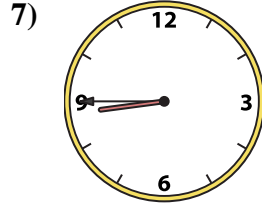
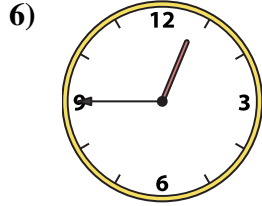

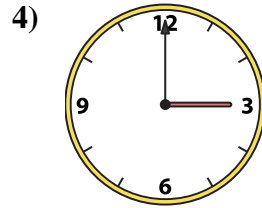
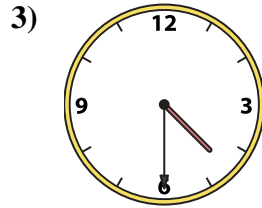
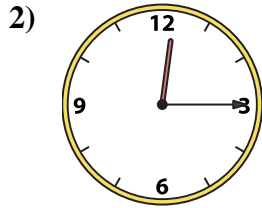
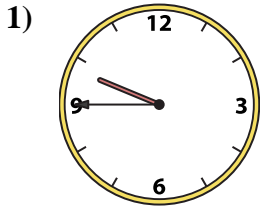




Match the analog clock to the digital clock.

Answers



A. **9:45**

B. **11:30**

C. **5:45**

D. **5:00**

E. **4:30**

F. **7:00**

G. **11:45**

H. **3:00**

I. **8:30**

J. **1:15**

K. **12:15**

L. **8:45**

M. **6:15**

N. **6:30**

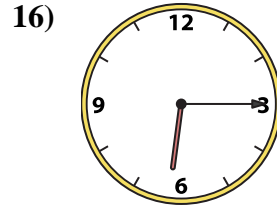
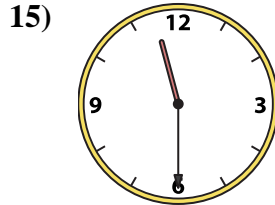
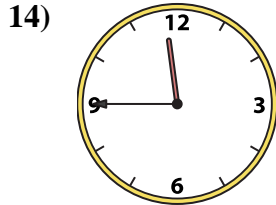
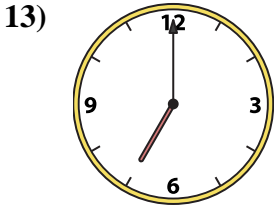
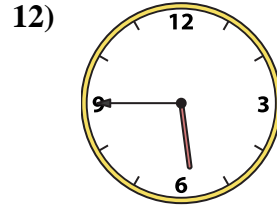
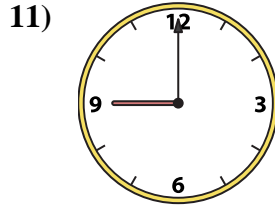
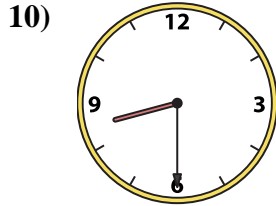

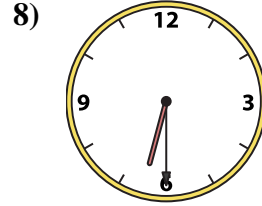
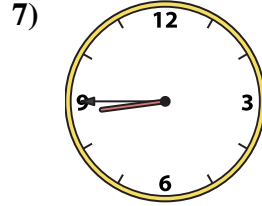

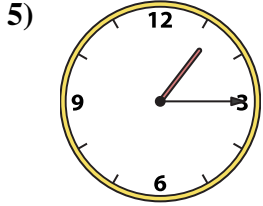
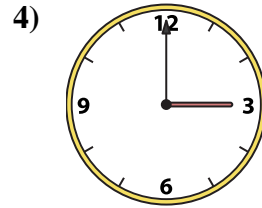
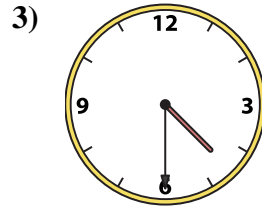
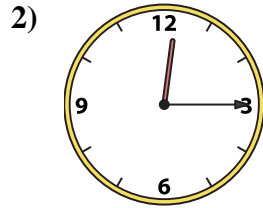
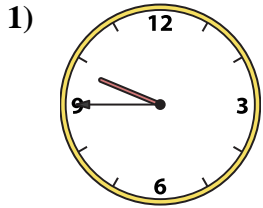
O. **12:45**

P. **9:00**

- 1. _____
- 2. _____
- 3. _____
- 4. _____
- 5. _____
- 6. _____
- 7. _____
- 8. _____
- 9. _____
- 10. _____
- 11. _____
- 12. _____
- 13. _____
- 14. _____
- 15. _____
- 16. _____



Match the analog clock to the digital clock.



A. **9:45**

B. **11:30**

C. **5:45**

D. **5:00**

E. **4:30**

F. **7:00**

G. **11:45**

H. **3:00**

I. **8:30**

J. **1:15**

K. **12:15**

L. **8:45**

M. **6:15**

N. **6:30**

O. **12:45**

P. **9:00**

Answers

1. **A**

2. **K**

3. **E**

4. **H**

5. **J**

6. **O**

7. **L**

8. **N**

9. **D**

10. **I**

11. **P**

12. **C**

13. **F**

14. **G**

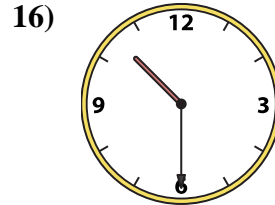
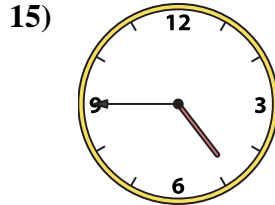
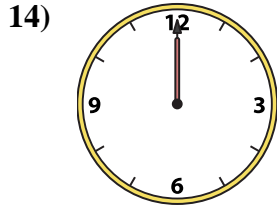
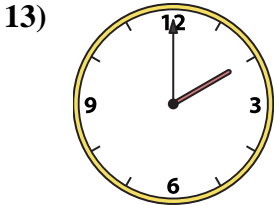
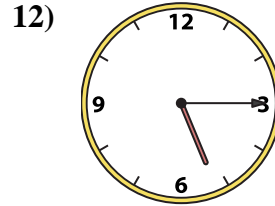
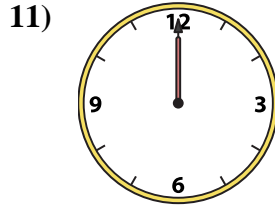
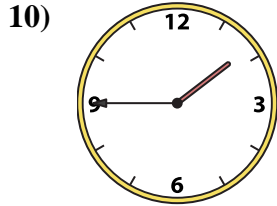
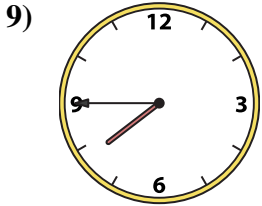
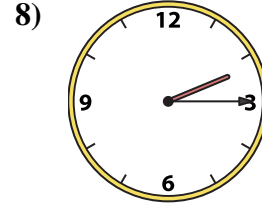
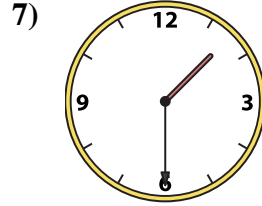
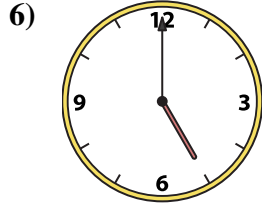

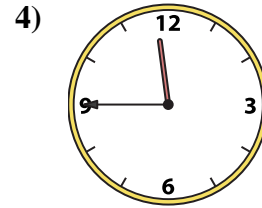
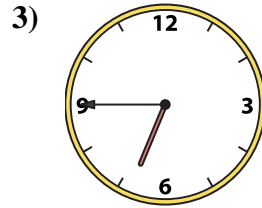
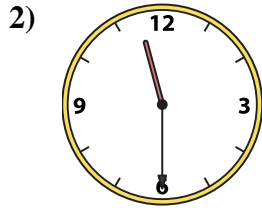
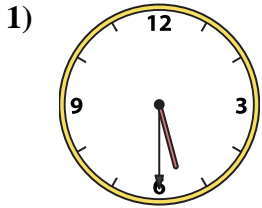
15. **B**

16. **M**



Match the analog clock to the digital clock.

Answers



A. **2:00**

B. **4:45**

C. **10:30**

D. **5:30**

E. **7:45**

F. **12:00**

G. **6:45**

H. **11:30**

I. **3:15**

J. **11:45**

K. **5:15**

L. **2:15**

M. **1:45**

N. **1:30**

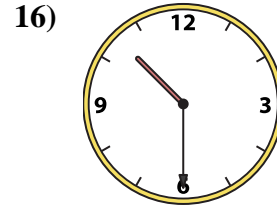
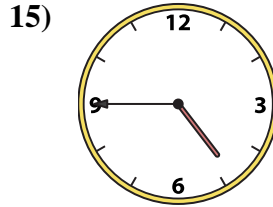
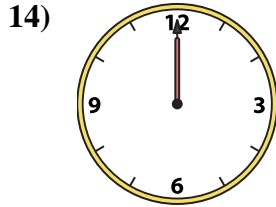
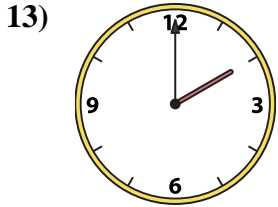
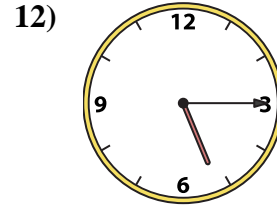
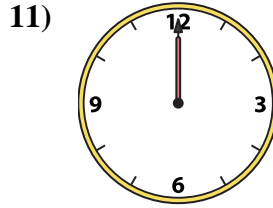
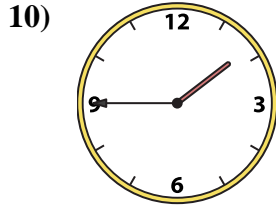
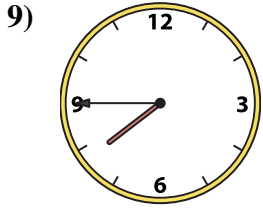
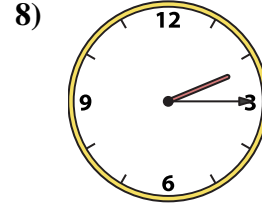
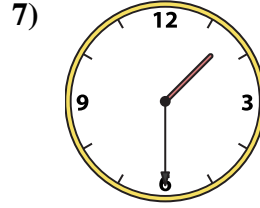

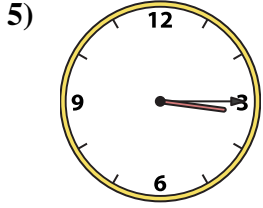
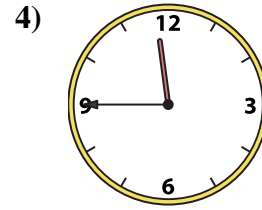
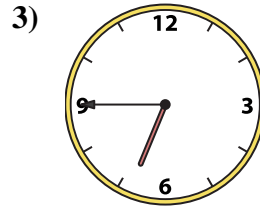
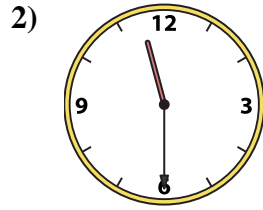
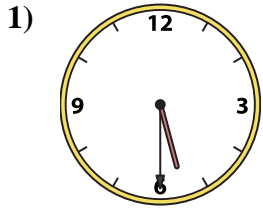
O. **12:00**

P. **5:00**

1. _____
2. _____
3. _____
4. _____
5. _____
6. _____
7. _____
8. _____
9. _____
10. _____
11. _____
12. _____
13. _____
14. _____
15. _____
16. _____



Match the analog clock to the digital clock.



A. **2:00**

B. **4:45**

C. **10:30**

D. **5:30**

E. **7:45**

F. **12:00**

G. **6:45**

H. **11:30**

I. **3:15**

J. **11:45**

K. **5:15**

L. **2:15**

M. **1:45**

N. **1:30**

O. **12:00**

P. **5:00**

Answers

1. **D**

2. **H**

3. **G**

4. **J**

5. **I**

6. **P**

7. **N**

8. **L**

9. **E**

10. **M**

11. **O**

12. **K**

13. **A**

14. **F**

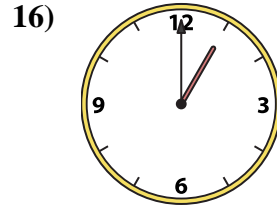
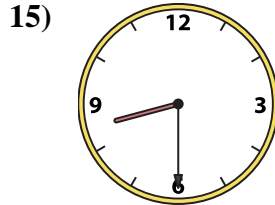
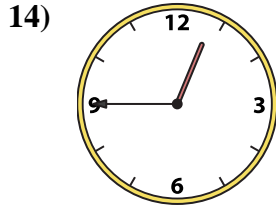
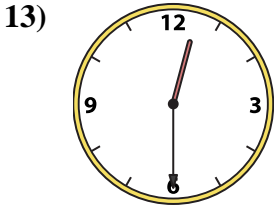
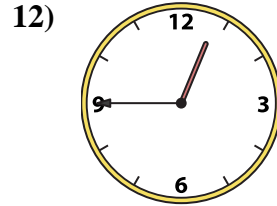
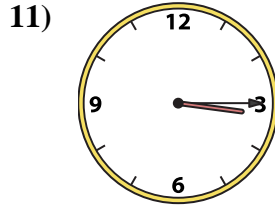
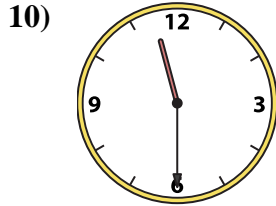
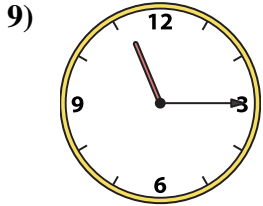
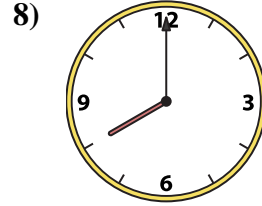
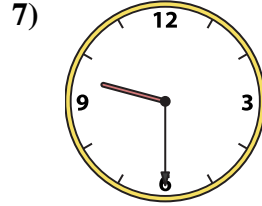

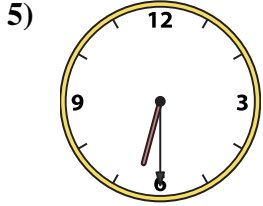
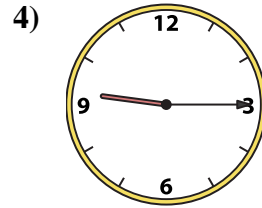
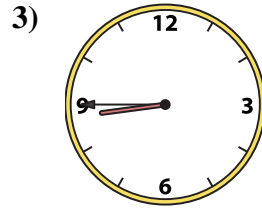
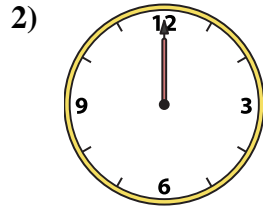
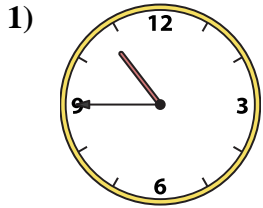
15. **B**

16. **C**



Match the analog clock to the digital clock.

Answers



A. 3:15

B. 12:45

C. 9:15

D. 1:00

E. 8:45

F. 12:00

G. 4:00

H. 12:30

I. 6:30

J. 10:45

K. 12:45

L. 8:00

M. 8:30

N. 9:30

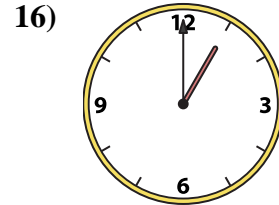
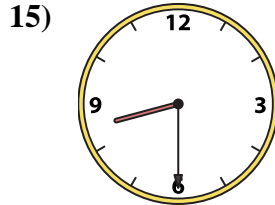
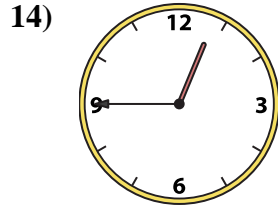
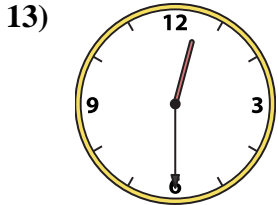
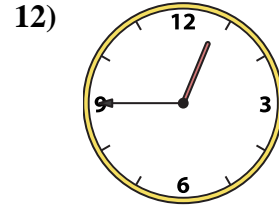
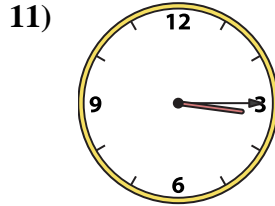
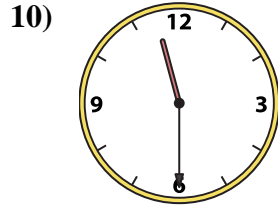
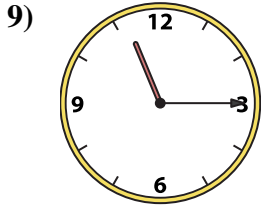
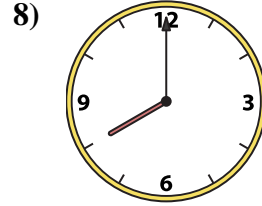
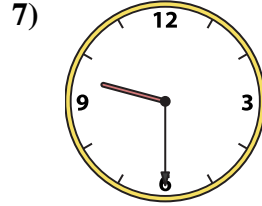

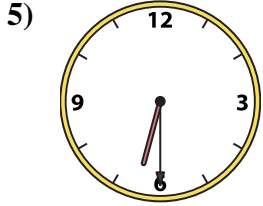
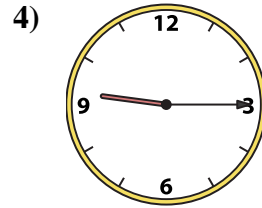
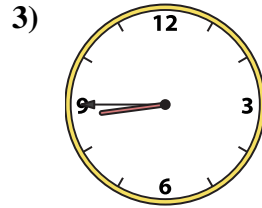
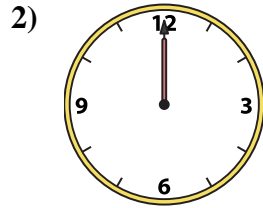
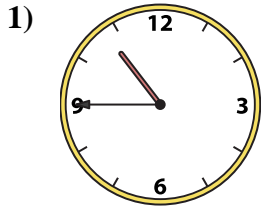
O. 11:30

P. 11:15

1. _____
2. _____
3. _____
4. _____
5. _____
6. _____
7. _____
8. _____
9. _____
10. _____
11. _____
12. _____
13. _____
14. _____
15. _____
16. _____



Match the analog clock to the digital clock.



A. **3:15**

B. **12:45**

C. **9:15**

D. **1:00**

E. **8:45**

F. **12:00**

G. **4:00**

H. **12:30**

I. **6:30**

J. **10:45**

K. **12:45**

L. **8:00**

M. **8:30**

N. **9:30**

O. **11:30**

P. **11:15**

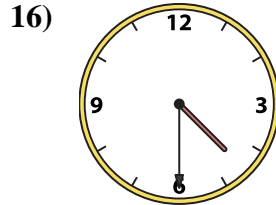
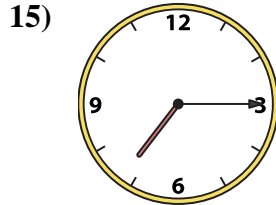
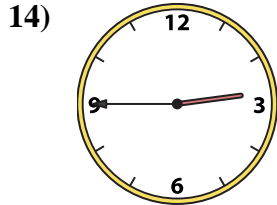
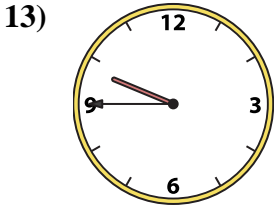
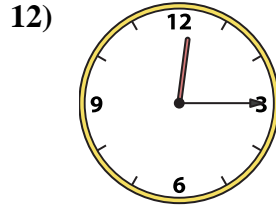
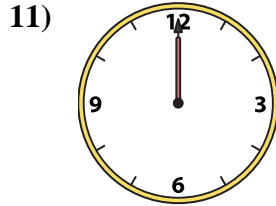
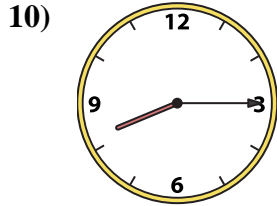
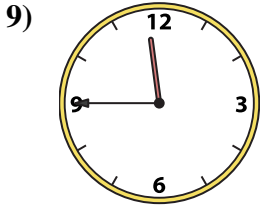

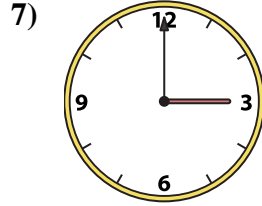

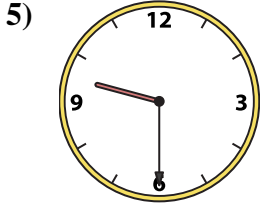
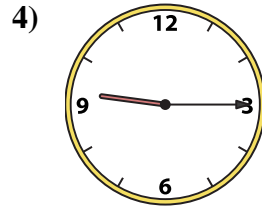
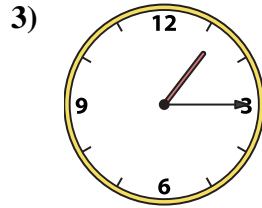
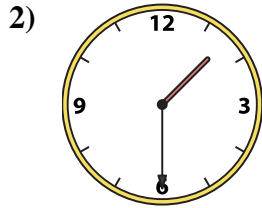
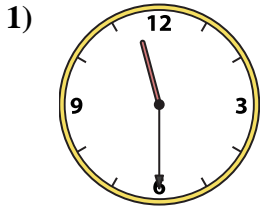
Answers

- 1. **J**
- 2. **F**
- 3. **E**
- 4. **C**
- 5. **I**
- 6. **G**
- 7. **N**
- 8. **L**
- 9. **P**
- 10. **O**
- 11. **A**
- 12. **B**
- 13. **H**
- 14. **K**
- 15. **M**
- 16. **D**



Match the analog clock to the digital clock.

Answers



A. **11:30**

B. **3:00**

C. **9:30**

D. **1:30**

E. **11:45**

F. **9:45**

G. **10:00**

H. **12:00**

I. **8:15**

J. **1:15**

K. **9:15**

L. **11:00**

M. **7:15**

N. **2:45**

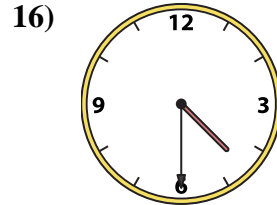
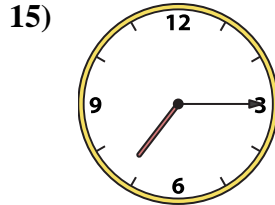
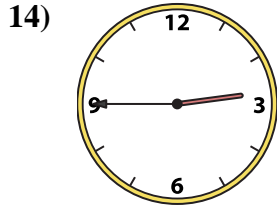
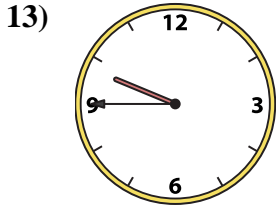
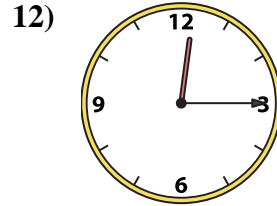
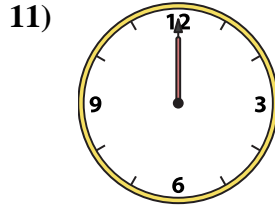
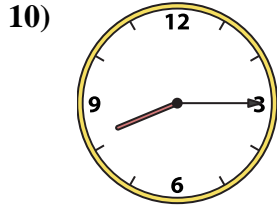
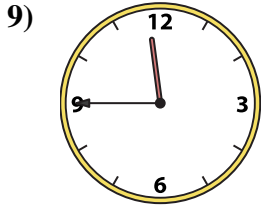
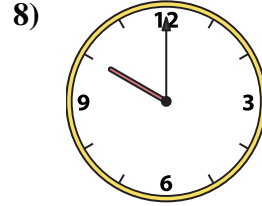
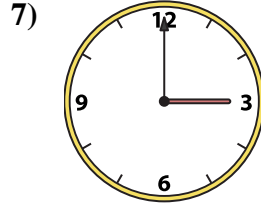

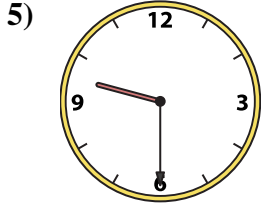
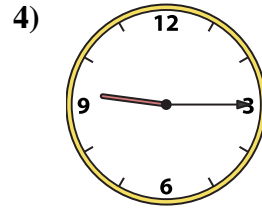
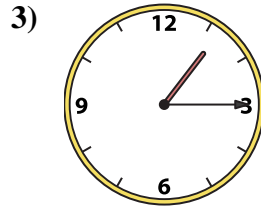
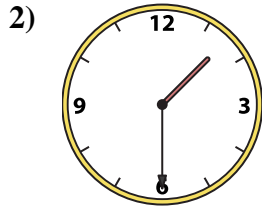
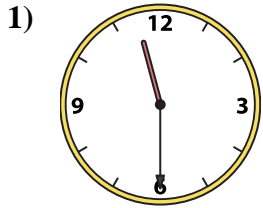
O. **4:30**

P. **12:15**

1. _____
2. _____
3. _____
4. _____
5. _____
6. _____
7. _____
8. _____
9. _____
10. _____
11. _____
12. _____
13. _____
14. _____
15. _____
16. _____



Match the analog clock to the digital clock.



A. **11:30**

B. **3:00**

C. **9:30**

D. **1:30**

E. **11:45**

F. **9:45**

G. **10:00**

H. **12:00**

I. **8:15**

J. **1:15**

K. **9:15**

L. **11:00**

M. **7:15**

N. **2:45**

O. **4:30**

P. **12:15**

Answers

1. **A**

2. **D**

3. **J**

4. **K**

5. **C**

6. **L**

7. **B**

8. **G**

9. **E**

10. **I**

11. **H**

12. **P**

13. **F**

14. **N**

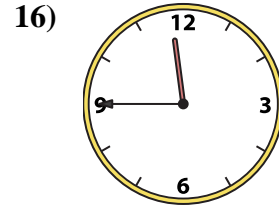
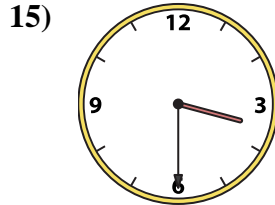
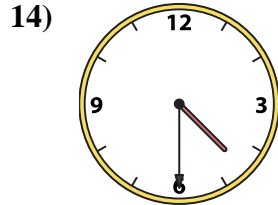
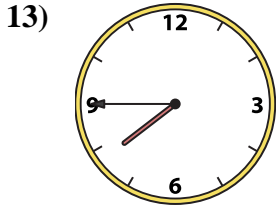
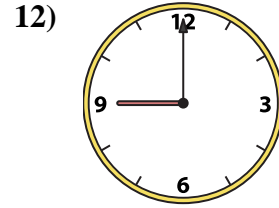
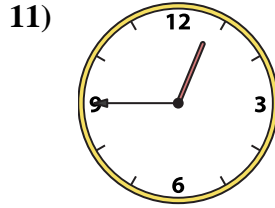
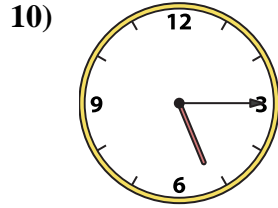
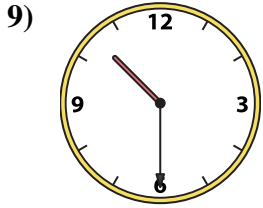

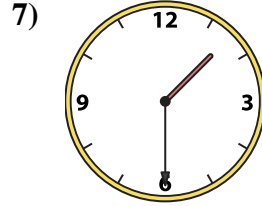
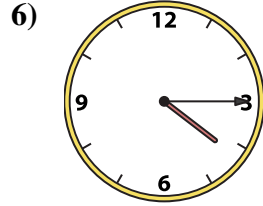
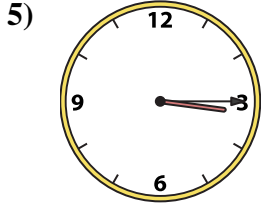
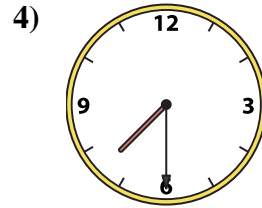
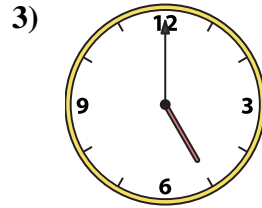
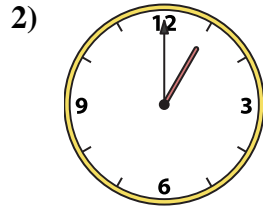
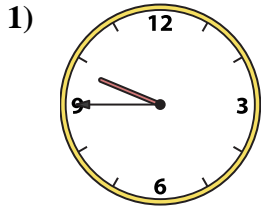
15. **M**

16. **O**



Match the analog clock to the digital clock.

Answers



A. **11:45**

B. **10:30**

C. **1:00**

D. **7:45**

E. **5:00**

F. **4:30**

G. **4:15**

H. **5:15**

I. **3:15**

J. **3:30**

K. **9:00**

L. **7:30**

M. **1:30**

N. **9:45**

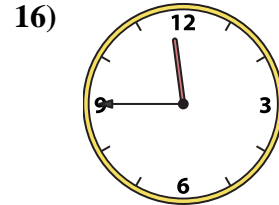
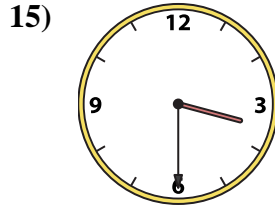
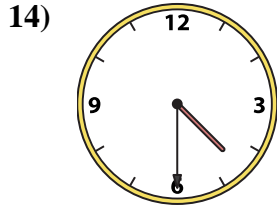
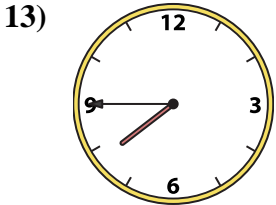
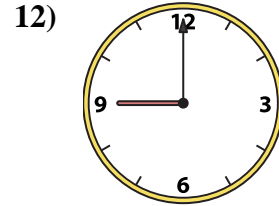
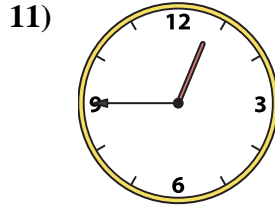
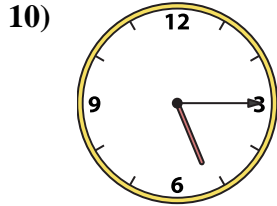
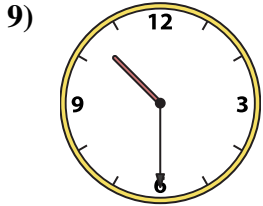
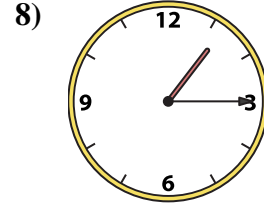
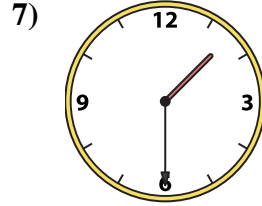
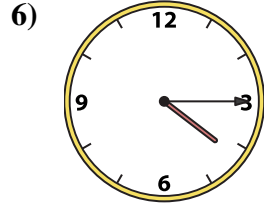
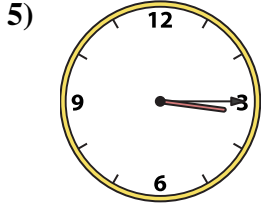
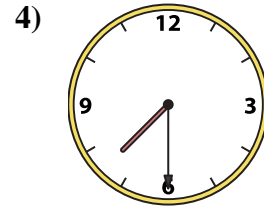
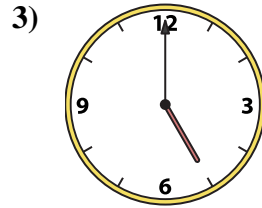
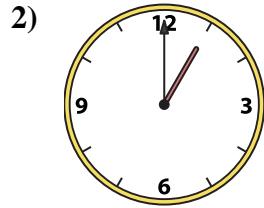
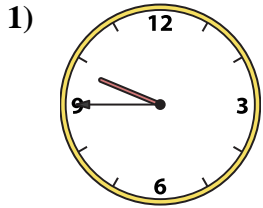
O. **1:15**

P. **12:45**

1. _____
2. _____
3. _____
4. _____
5. _____
6. _____
7. _____
8. _____
9. _____
10. _____
11. _____
12. _____
13. _____
14. _____
15. _____
16. _____



Match the analog clock to the digital clock.



A. **11:45**

B. **10:30**

C. **1:00**

D. **7:45**

E. **5:00**

F. **4:30**

G. **4:15**

H. **5:15**

I. **3:15**

J. **3:30**

K. **9:00**

L. **7:30**

M. **1:30**

N. **9:45**

O. **1:15**

P. **12:45**

Answers

1. **N**

2. **C**

3. **E**

4. **L**

5. **I**

6. **G**

7. **M**

8. **O**

9. **B**

10. **H**

11. **P**

12. **K**

13. **D**

14. **F**

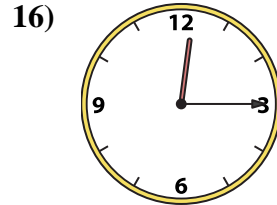
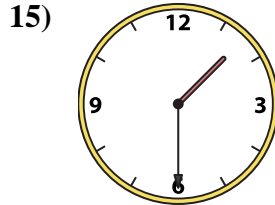
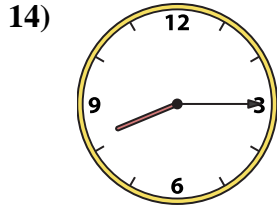
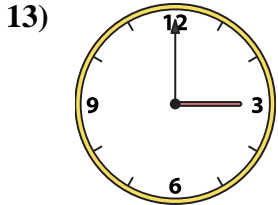
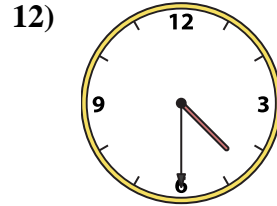
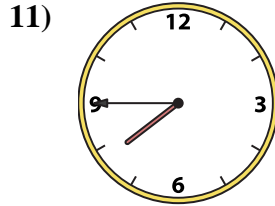
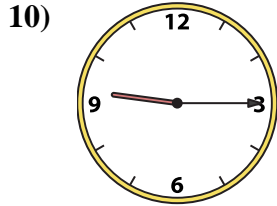
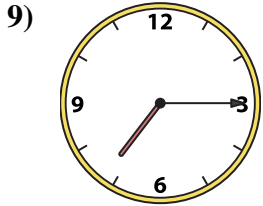
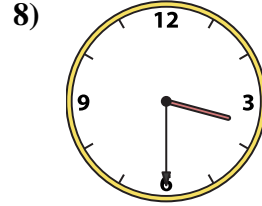

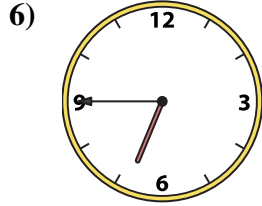
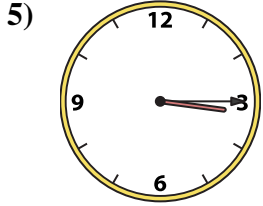
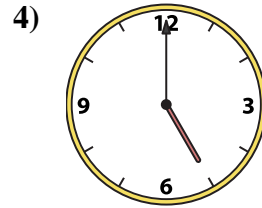
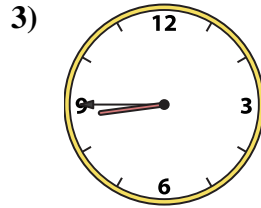
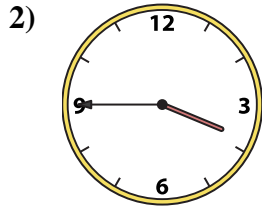
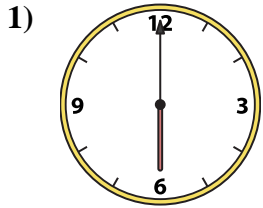
15. **J**

16. **A**



Match the analog clock to the digital clock.

Answers



A. **5:00**

B. **8:45**

C. **3:15**

D. **3:30**

E. **3:00**

F. **7:45**

G. **12:15**

H. **1:30**

I. **3:45**

J. **6:45**

K. **4:00**

L. **7:15**

M. **8:15**

N. **9:15**

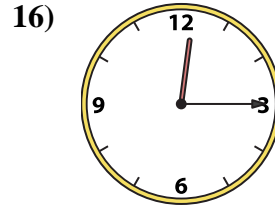
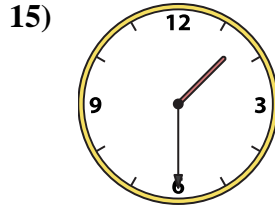
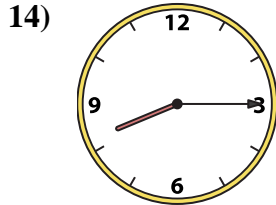
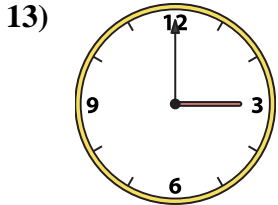
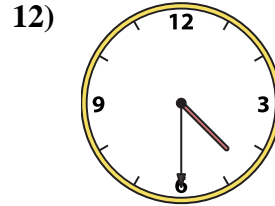
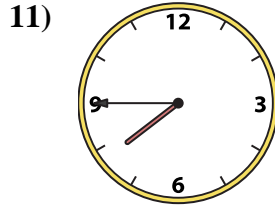
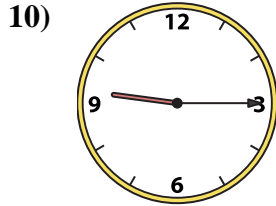
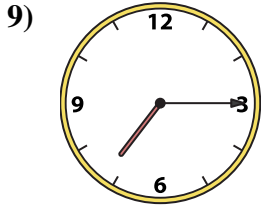
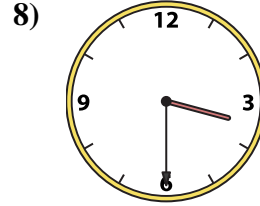

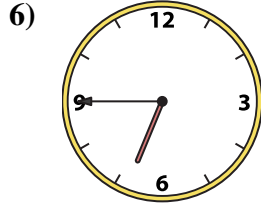
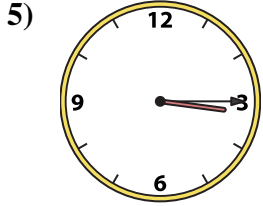
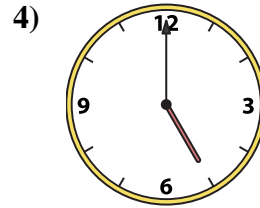
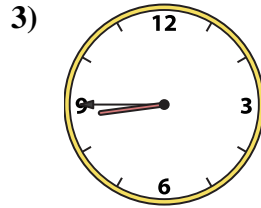
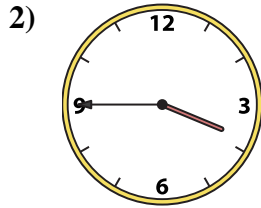
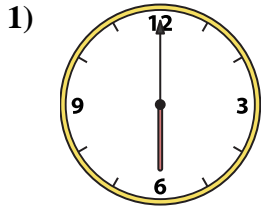
O. **6:00**

P. **4:30**

- 1. _____
- 2. _____
- 3. _____
- 4. _____
- 5. _____
- 6. _____
- 7. _____
- 8. _____
- 9. _____
- 10. _____
- 11. _____
- 12. _____
- 13. _____
- 14. _____
- 15. _____
- 16. _____



Match the analog clock to the digital clock.



A. **5:00**

B. **8:45**

C. **3:15**

D. **3:30**

E. **3:00**

F. **7:45**

G. **12:15**

H. **1:30**

I. **3:45**

J. **6:45**

K. **4:00**

L. **7:15**

M. **8:15**

N. **9:15**

O. **6:00**

P. **4:30**

Answers

1. **O**

2. **I**

3. **B**

4. **A**

5. **C**

6. **J**

7. **K**

8. **D**

9. **L**

10. **N**

11. **F**

12. **P**

13. **E**

14. **M**

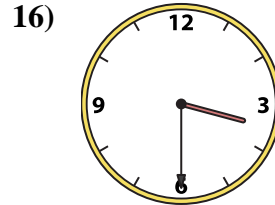
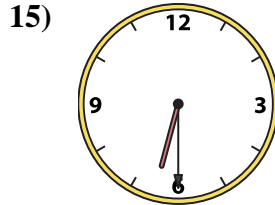
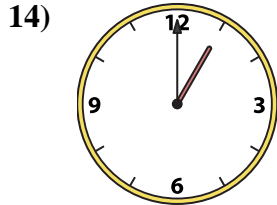
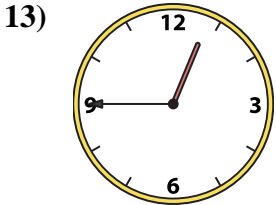
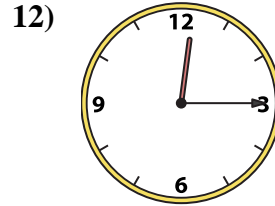
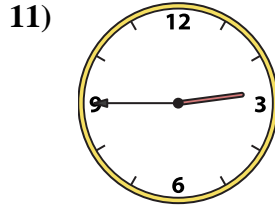
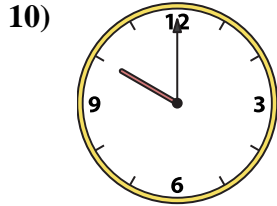
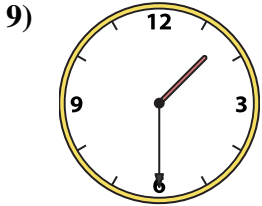
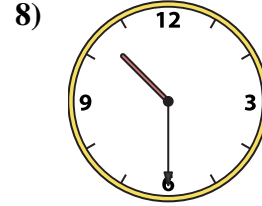
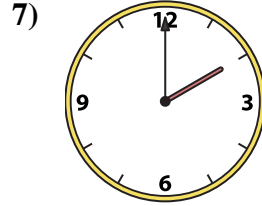
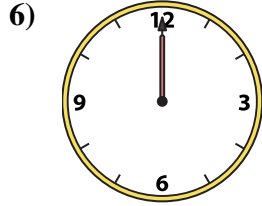

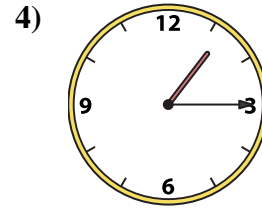
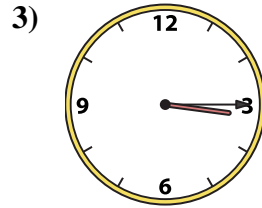
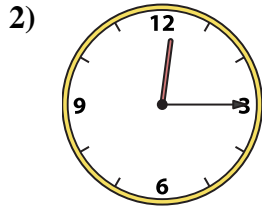
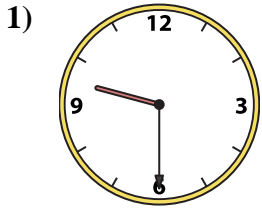
15. **H**

16. **G**



Match the analog clock to the digital clock.

Answers



A. **10:00**

B. **6:30**

C. **3:30**

D. **2:00**

E. **1:30**

F. **12:15**

G. **12:45**

H. **9:30**

I. **1:15**

J. **10:30**

K. **12:15**

L. **12:00**

M. **3:15**

N. **2:45**

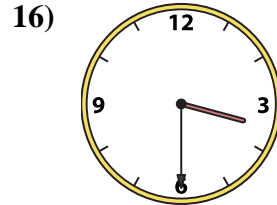
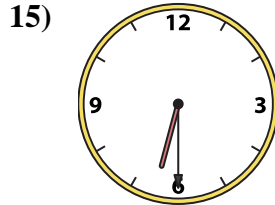
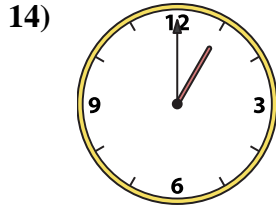
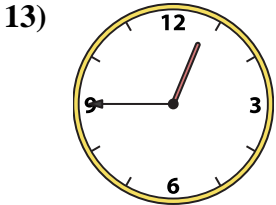
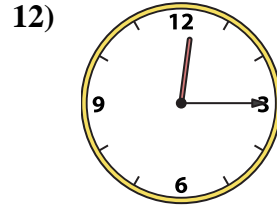
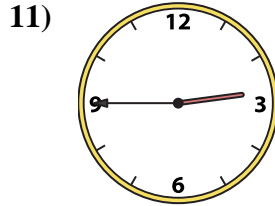
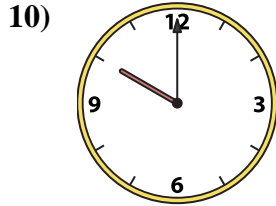
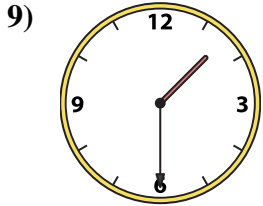
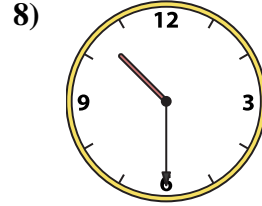
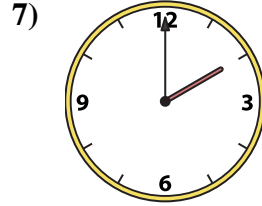
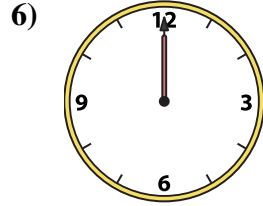
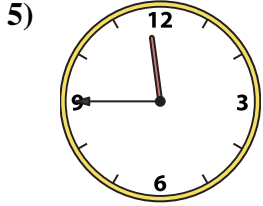
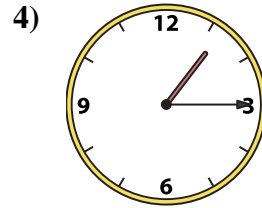
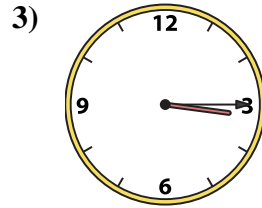
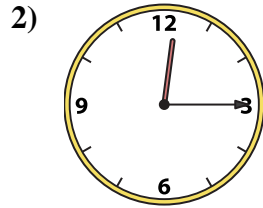
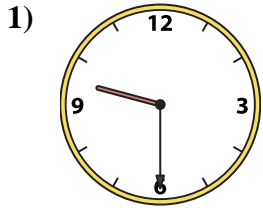
O. **1:00**

P. **11:45**

1. _____
2. _____
3. _____
4. _____
5. _____
6. _____
7. _____
8. _____
9. _____
10. _____
11. _____
12. _____
13. _____
14. _____
15. _____
16. _____



Match the analog clock to the digital clock.



A. **10:00**

B. **6:30**

C. **3:30**

D. **2:00**

E. **1:30**

F. **12:15**

G. **12:45**

H. **9:30**

I. **1:15**

J. **10:30**

K. **12:15**

L. **12:00**

M. **3:15**

N. **2:45**

O. **1:00**

P. **11:45**

Answers

1. **H**

2. **K**

3. **M**

4. **I**

5. **P**

6. **L**

7. **D**

8. **J**

9. **E**

10. **A**

11. **N**

12. **F**

13. **G**

14. **O**

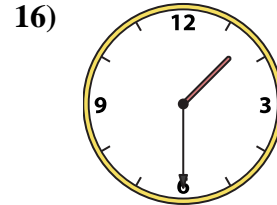
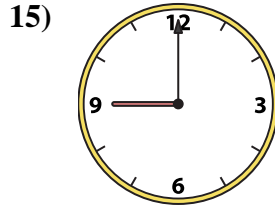
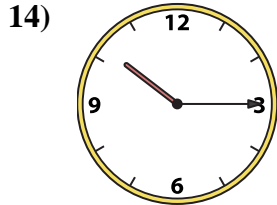
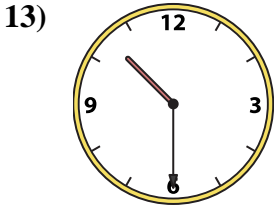
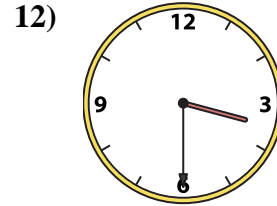
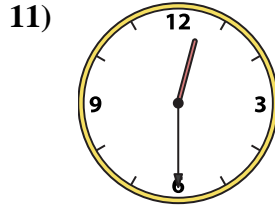
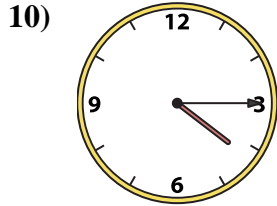
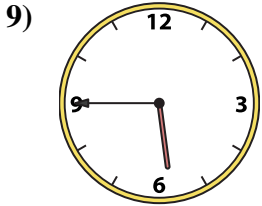
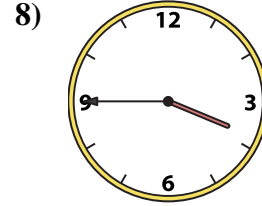
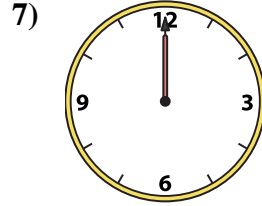
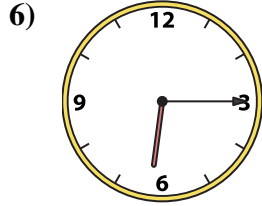

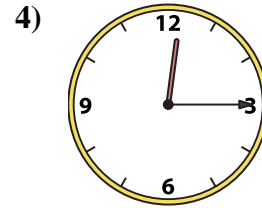
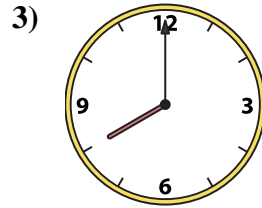
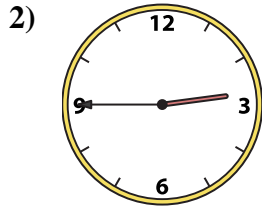

15. **B**

16. **C**



Match the analog clock to the digital clock.

Answers



A. **12:00**

B. **4:15**

C. **8:00**

D. **9:00**

E. **1:30**

F. **12:30**

G. **3:30**

H. **2:45**

I. **3:45**

J. **10:15**

K. **5:45**

L. **6:15**

M. **12:15**

N. **10:00**

O. **10:30**

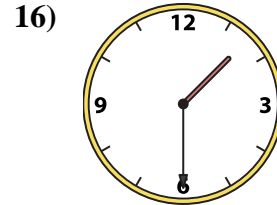
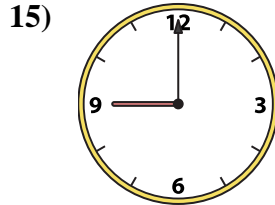
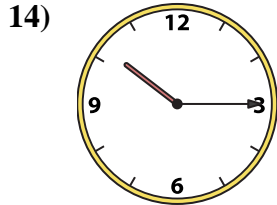
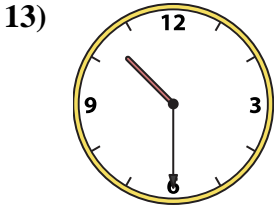
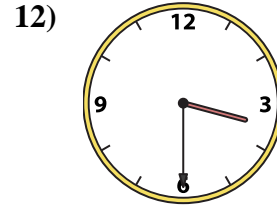
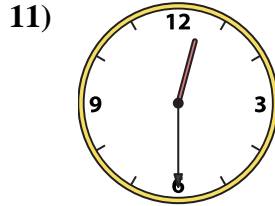
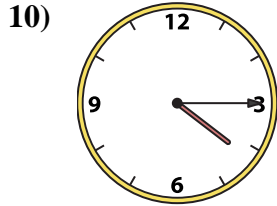
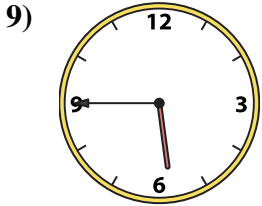
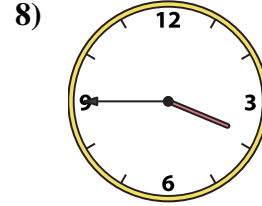
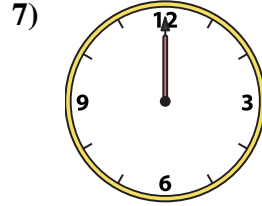
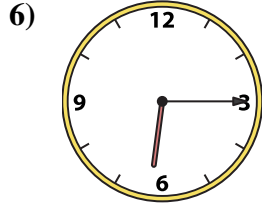

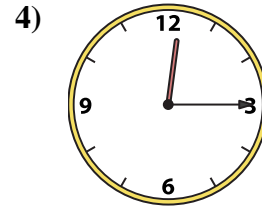
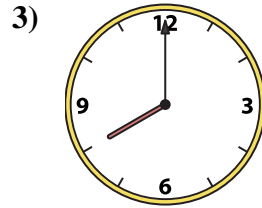
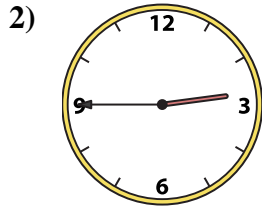

P. **5:00**

1. _____
2. _____
3. _____
4. _____
5. _____
6. _____
7. _____
8. _____
9. _____
10. _____
11. _____
12. _____
13. _____
14. _____
15. _____
16. _____



Match the analog clock to the digital clock.

Answers



A. **12:00**

B. **4:15**

C. **8:00**

D. **9:00**

E. **1:30**

F. **12:30**

G. **3:30**

H. **2:45**

I. **3:45**

J. **10:15**

K. **5:45**

L. **6:15**

M. **12:15**

N. **10:00**

O. **10:30**

P. **5:00**

1. **P**

2. **H**

3. **C**

4. **M**

5. **N**

6. **L**

7. **A**

8. **I**

9. **K**

10. **B**

11. **F**

12. **G**

13. **O**

14. **J**

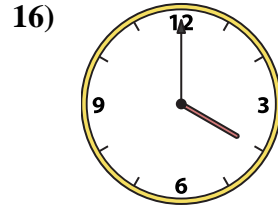
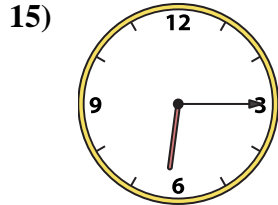
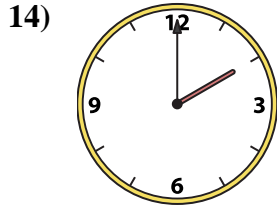
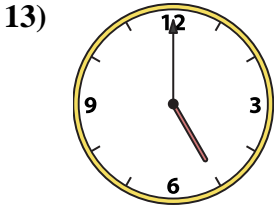
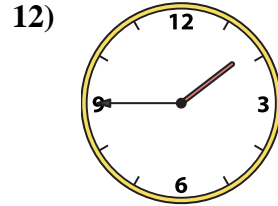
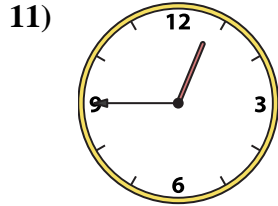
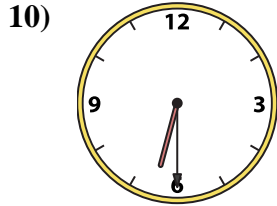

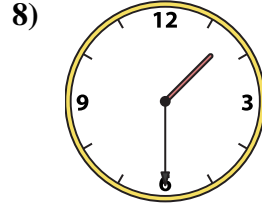
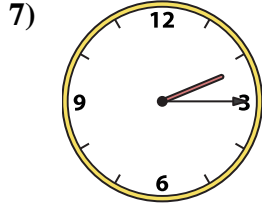
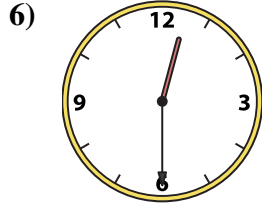

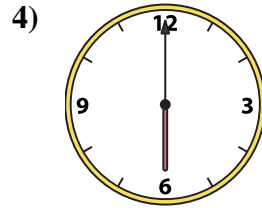

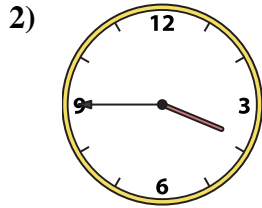
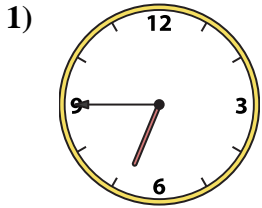
15. **D**

16. **E**



Match the analog clock to the digital clock.

Answers



A. **6:30**

B. **6:15**

C. **1:30**

D. **5:00**

E. **6:00**

F. **6:45**

G. **2:15**

H. **12:45**

I. **11:30**

J. **2:00**

K. **3:45**

L. **12:30**

M. **4:00**

N. **10:00**

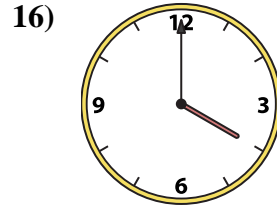
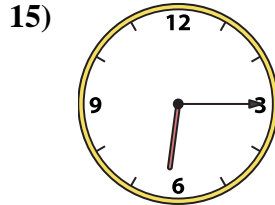
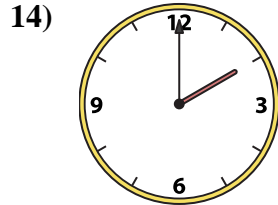
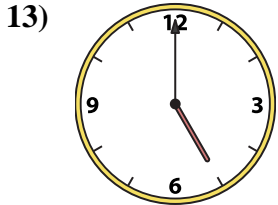
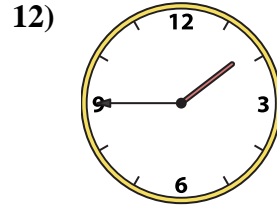
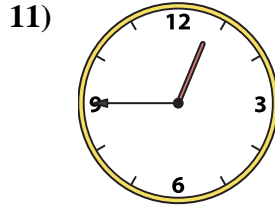
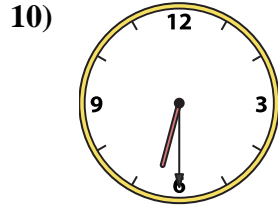
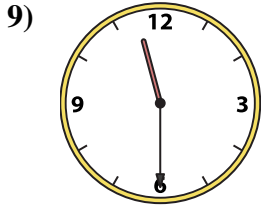
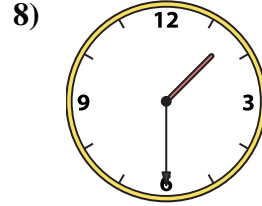
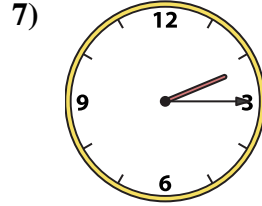
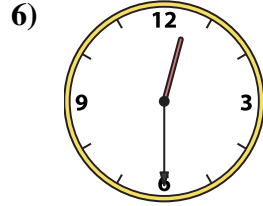
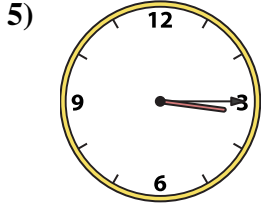
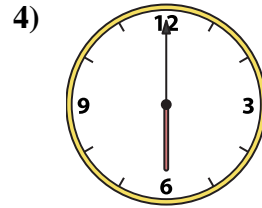
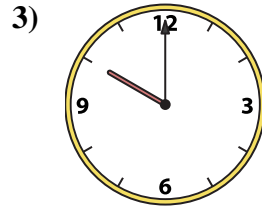
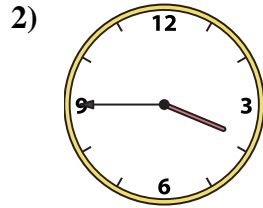
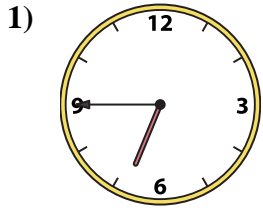
O. **3:15**

P. **1:45**

1. _____
2. _____
3. _____
4. _____
5. _____
6. _____
7. _____
8. _____
9. _____
10. _____
11. _____
12. _____
13. _____
14. _____
15. _____
16. _____



Match the analog clock to the digital clock.



A. **6:30**

B. **6:15**

C. **1:30**

D. **5:00**

E. **6:00**

F. **6:45**

G. **2:15**

H. **12:45**

I. **11:30**

J. **2:00**

K. **3:45**

L. **12:30**

M. **4:00**

N. **10:00**

O. **3:15**

P. **1:45**

Answers

1. **F**

2. **K**

3. **N**

4. **E**

5. **O**

6. **L**

7. **G**

8. **C**

9. **I**

10. **A**

11. **H**

12. **P**

13. **D**

14. **J**

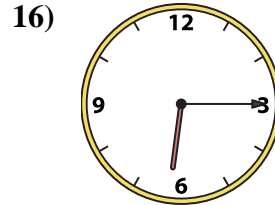
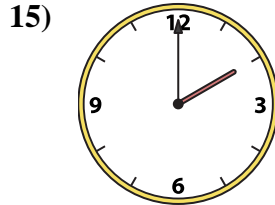
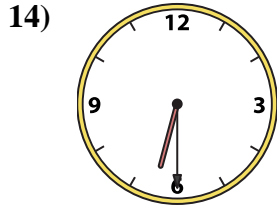
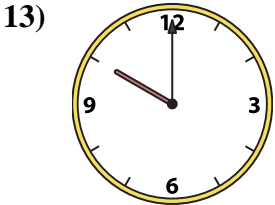
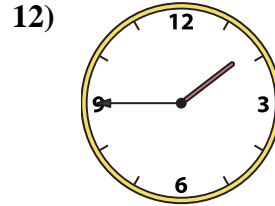
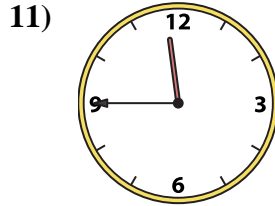
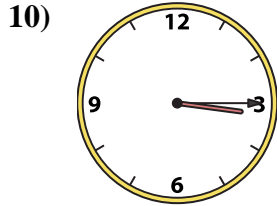

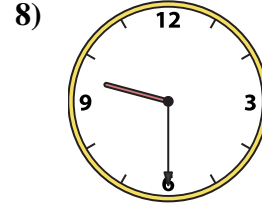
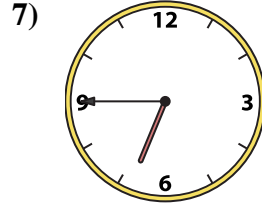
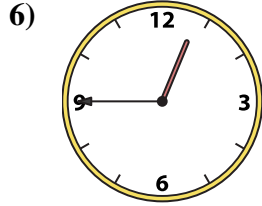

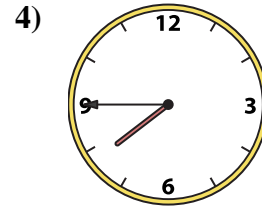
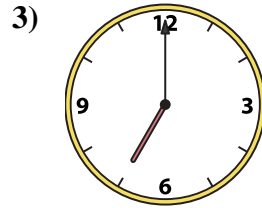
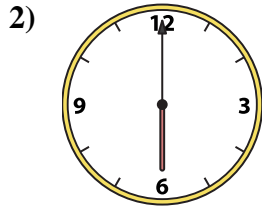
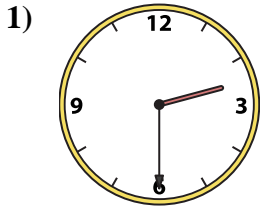
15. **B**

16. **M**



Match the analog clock to the digital clock.

Answers



A. **10:00**

B. **2:30**

C. **2:00**

D. **3:15**

E. **7:45**

F. **7:00**

G. **12:00**

H. **12:15**

I. **6:00**

J. **11:45**

K. **1:45**

L. **9:30**

M. **12:45**

N. **6:30**

O. **6:45**

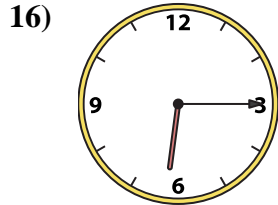
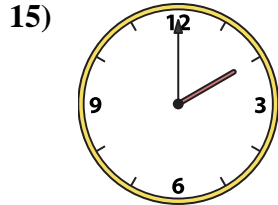
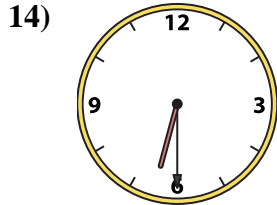
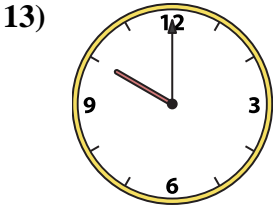
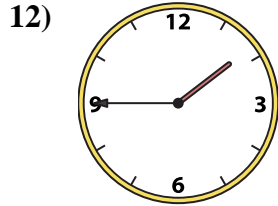
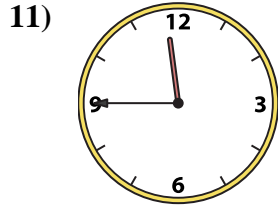
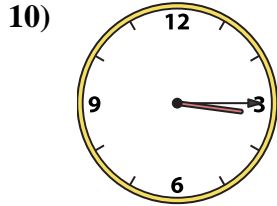

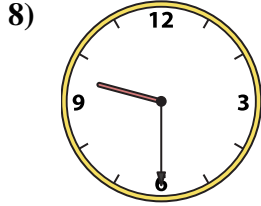
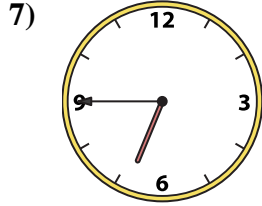
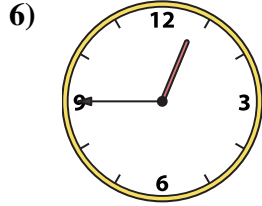

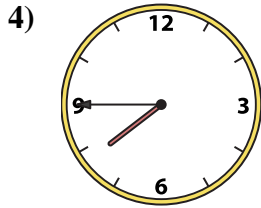
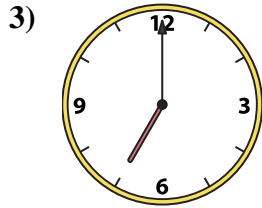
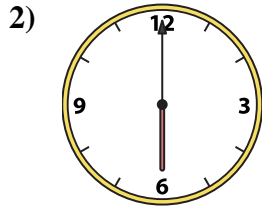
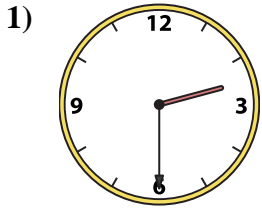
P. **6:15**

- 1. _____
- 2. _____
- 3. _____
- 4. _____
- 5. _____
- 6. _____
- 7. _____
- 8. _____
- 9. _____
- 10. _____
- 11. _____
- 12. _____
- 13. _____
- 14. _____
- 15. _____
- 16. _____



Match the analog clock to the digital clock.

Answers



A. **10:00**

B. **2:30**

C. **2:00**

D. **3:15**

E. **7:45**

F. **7:00**

G. **12:00**

H. **12:15**

I. **6:00**

J. **11:45**

K. **1:45**

L. **9:30**

M. **12:45**

N. **6:30**

O. **6:45**

P. **6:15**

- 1. **B**
- 2. **I**
- 3. **F**
- 4. **E**
- 5. **G**
- 6. **M**
- 7. **O**
- 8. **L**
- 9. **H**
- 10. **D**
- 11. **J**
- 12. **K**
- 13. **A**
- 14. **N**
- 15. **C**
- 16. **P**